

# St. Thomas School, Dhurwa, Ranchi

## Time







Fill in the blanks:

- 1) Clock tells us the time.
- 2) Clock has two hands.
- 3) A long hand and a short hand.
- 4) The long hand tells us the minutes.
- 5) The short hand tells us the hour.
- 6) 1 day = 24 hours.
- 7) 1 hour = 60 minutes.
- 8) 1min = 60 seconds.

Name \_\_\_\_\_

### **o'clock and half past**

Write down the time shown on the clocks.



# Draw the Correct Time

Draw the hands to show the correct time on each clock.



7:00



4:00



1:00



10:00