

Let Us Recall

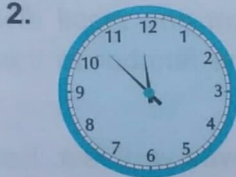
In the previous class, we learnt how to read time from a clock. We also learnt how to use a.m. or p.m. to denote time. Here, we shall learn some more concepts regarding clocks.

EXERCISE 13A


A. Write the time for each clock :



7:27

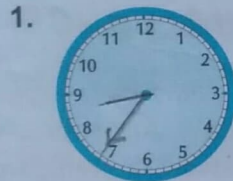


11:52

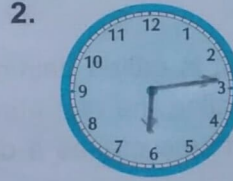


9:13

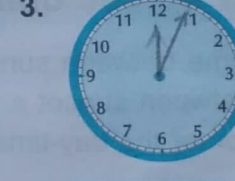
B. Draw the two hands to show the time :



8:36



6:14



12:04

C. Write the time using a.m. or p.m. :


1. 10:15 in the morning 10:15 a.m.

2. 4:36 in the evening 4:36 p.m.

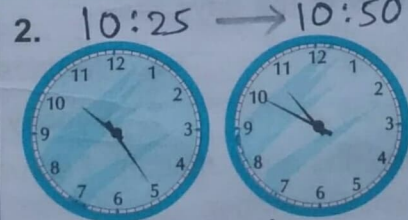
3. 12:05 in the night 12:05 a.m.

4. 3 hours after 11:30 a.m. 2:30 p.m.

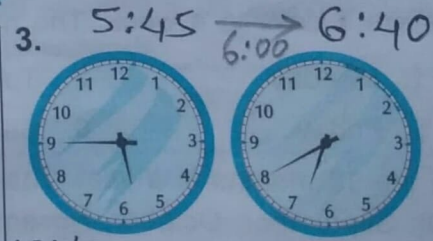
D. How many minutes have passed from clock A to clock B?



$20 + 15 = 35$ minutes



25 minutes



$15 + 40 = 55$ minutes

E. Find the time duration between 8:20 a.m. and 12:05 p.m. 3 hours 45 minutes

F. How many days are there from 8th April to 5th June? 59 days

G. What date is 18 days after 26th September? 14th October

CLASS: 5

MATHS

VIDEO: 1

Ch. 13. TIME

Q.E.

Solution: The time duration between 8:20 a.m. and 12:05 p.m.

8:20_{a.m.} $\xrightarrow{40 \text{ min}}$ 9:00_{a.m.} $\xrightarrow{3 \text{ hrs}}$ 12:00_{noon} $\xrightarrow{5 \text{ min}}$ 12:05_{p.m.}

= 3 hours and $(40 + 5)$ minutes
= 3 hours 45 minutes Ans

Q.F. Solution: Days left out in April = $30 - 7 = 23$

Days in May = 31

Days in June = 5

Total no. of days

= $23 + 31 + 5 = 59$

Exercise-13A Page-189

So, there are 59 days from 8th April to 5th June. Ans

Q.G. Solution: Days in September = $30 - 26 = 4$

Days in October = $18 - 4 = 14$

So, the date 18 days after 26th September is 14th October. Ans