

ST. THOMAS SCHOOL, DHURWA, RANCHI

SESSION – 2021- 2022 (THIRD TERM)

SUBJECT – MATHS

CLASS- STD 1

ASSIGNMENT – 12

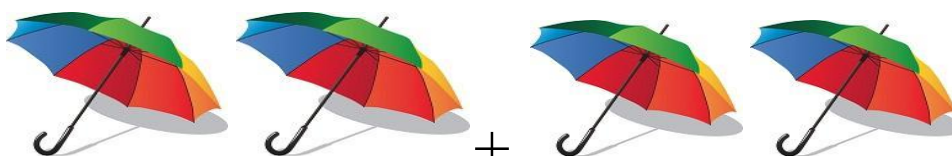
Work to be done in class work copy

I. Write the following tables in your copy

TIMES TABLE CHART 1 TO 5				
1 X 1 = 1	2 X 1 = 2	3 X 1 = 3	4 X 1 = 4	5 X 1 = 5
1 X 2 = 2	2 X 2 = 4	3 X 2 = 6	4 X 2 = 8	5 X 2 = 10
1 X 3 = 3	2 X 3 = 6	3 X 3 = 9	4 X 3 = 12	5 X 3 = 15
1 X 4 = 4	2 X 4 = 8	3 X 4 = 12	4 X 4 = 16	5 X 4 = 20
1 X 5 = 5	2 X 5 = 10	3 X 5 = 15	4 X 5 = 20	5 X 5 = 25
1 X 6 = 6	2 X 6 = 12	3 X 6 = 18	4 X 6 = 24	5 X 6 = 30
1 X 7 = 7	2 X 7 = 14	3 X 7 = 21	4 X 7 = 28	5 X 7 = 35
1 X 8 = 8	2 X 8 = 16	3 X 8 = 24	4 X 8 = 32	5 X 8 = 40
1 X 9 = 9	2 X 9 = 18	3 X 9 = 27	4 X 9 = 36	5 X 9 = 45
1 X 10 = 10	2 X 10 = 20	3 X 10 = 30	4 X 10 = 40	5 X 10 = 50


II. Complete the following-

a.

 = 4


2 + 2 = 4

2 x 2 = 4

b.  = 6

$$2 + 2 + 2 = 6$$

$$2 \times 3 = 6$$

c.  = 9



$$3 + 3 + 3 = 9$$

$$3 \times 3 = 9$$

d.  = 16



$$4 + 4 + 4 + 4 = 16$$

$$4 \times 4 = 16$$

III. Observe, say and write:

- a. 2 multiplied by 3 is equal to = 6
- b. 3 multiplied by 3 is equal to = 9
- c. 4 multiplied by 3 is equal to = 12
- d. 5 multiplied by 3 is equal to = 15

IV. Multiply and write:

- a. $3 \times 5 = 15$
- b. $4 \times 10 = 40$
- c. $0 \times 1 = 0$
- d. $5 \times 4 = 20$
- e. $2 \times 1 = 2$

V. Fill in the blanks-

- a. 1 five is equals to 5.
- b. 2 five is equals to 10.
- c. Repeated addition is called multiplication.
- d. 0 multiplied by any number is equal to 0
- e. 1 multiplied by any number is equal to 1

VI. Word problems-

1. There are 5 tables and 5
each tables has 4 legs. X 4
How many legs are there in all? 20

2. There are seven cows and 7
each cow has 4 legs . X 4
How many legs are in all? 28