

**ST. THOMAS SCHOOL, DHURWA, RANCHI**

**SESSION – 2021- 2022 (SECOND TERM)**

**SUBJECT – MATHS**

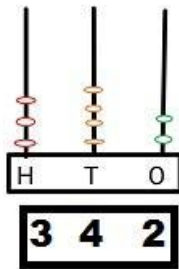
**CLASS- STD 1**

**ATTACHMENT – 11**

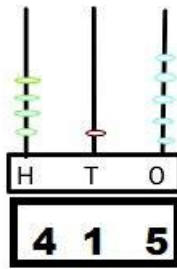
**Work to be done in class work copy**

**Count the beads and write the numbers below:**

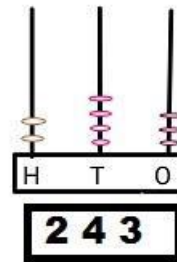
**a)**



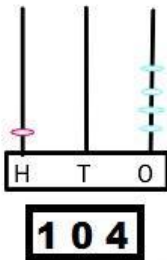
**b)**



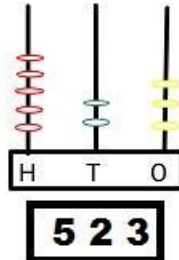
**c)**



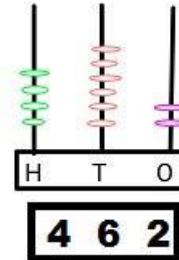
**d)**



**e)**

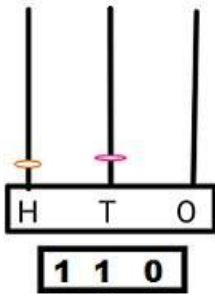


**f)**



Draw beads on the abacus to show the given numbers

a)



b)

