

ST. THOMAS SCHOOL, DHURWA, RANCHI

SESSION – 2021- 2022 (SECOND TERM)


SUBJECT – MATHS

CLASS- STD 1

ATTACHMENT – 10

Work to be done in class work copy

DRAW AND COLOUR FIVE SHAPES AND WRITE THEIR NAMES:




Triangle




Rectangle



Circle



Square







Cylinder

WRITE ANY 3 EXAMPLES OF THE FOLLOWING SHAPES:

- a) Circle - coin, C D, wheel
- b) Square – ludo, chessboard, carrom board
- c) Rectangle – blackboard, table top, T.V screen
- d) Triangle – set – square, pizza slice, hanger
- e) Cylinder – gas cylinder, pencil, rod

WRITE NUMBER OF SIDES OF THE GIVEN SHAPES

Sl. No	SHAPES	NUMBER OF SIDES
a)	 Circle	0 side
b)	 Square	4 sides
c)	 Rectangle	4 sides
d)	 Triangle	3 sides

